



**ALL SAINTS
CATHOLIC SCHOOL**
Growing Leaders in Mind, Body, and Spirit

Going into
First Grade
Summer Coursework 2022
Math Skills

Name: _____

Date: _____


©2022TunstallandGrant

Skills Check: Writing Numbers

Write the numbers in the chart.

Score: _____

1									




Name: _____


Date: _____
©2022TunstallandGrant


Skills Check: Identify Numbers


Count each set of heart spots. Write the numeral.


Score: _____























Name: _____

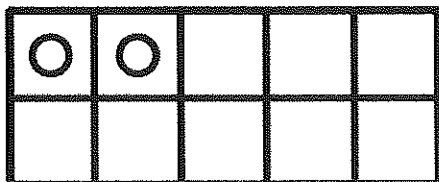
Date: _____

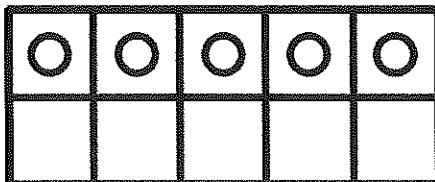
©2022TunstallandGrant

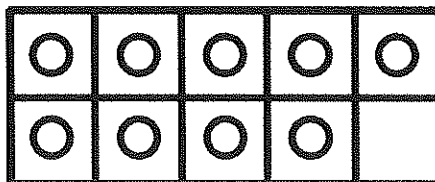
Skills Check: Ten Frame Numbers


Study each ten frame. Write the numeral.

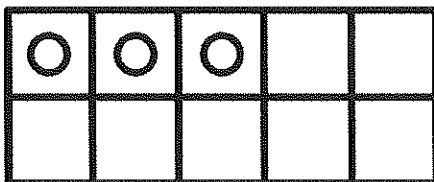
Score: _____

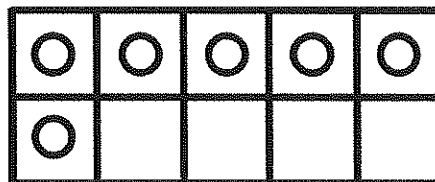


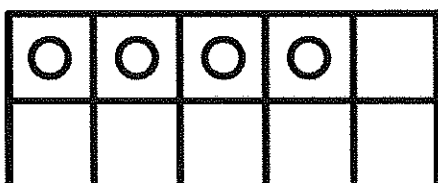


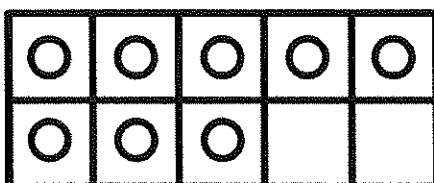





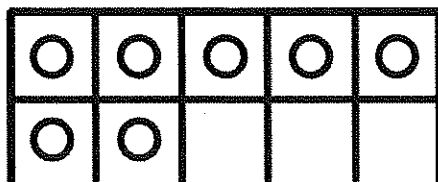


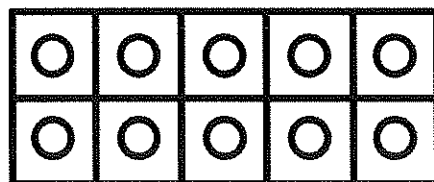


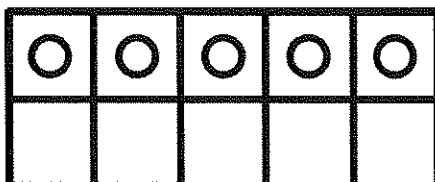












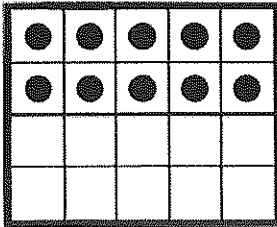
Name: _____


Date: _____
©2022TunstallandGrant


Skills Check: Twenty Frame Numbers


Study each twenty frame. Write the numeral.


Score: _____




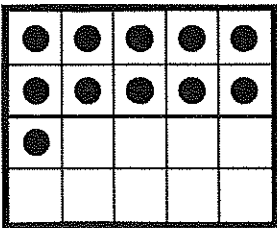



























Name: _____

Date: _____

©2022TunstallandGrant

Skills Check: Missing Numbers

Fill in the missing numbers in the series.

Score: _____

5, 6, _____, 8, _____, 10, _____

_____, 3, 4, 5, _____, 7, _____

0, _____, 2, 3, _____, 5, _____

7, 8, 9, _____, 11, _____, _____

4, _____, 6, _____, 8, _____, 10

_____, 7, 8, _____, 10, _____

1, _____, _____, 4, 5, 6, _____

8, 9, _____, 11, 12, _____, _____

10, 11, _____, 13, _____, _____

6, _____, 8, 9, _____, 11, _____

Name: _____

Date: _____

©2022TunstallandGrant

Skills Check: Comparing Numbers

Circle the greater number.

Score: _____

6	4	12	6	9	10	15	18
14	19	17	5	12	18	13	15
15	20	11	19	15	11	20	8
7	2	17	12	4	1	16	18
5	17	3	9	10	8	0	20
2	14	19	14	8	10	9	16
12	19	20	6	5	4	13	17
6	1	12	8	7	11	14	20
18	10	17	0	3	1	0	11
9	7	11	8	20	10	1	15

Name: _____

Date: _____

©2022TunstallandGrant

Skills Check: Comparing Numbers

Circle the number that is less.

Score: _____

6	4	12	6	9	10	15	18
14	19	17	5	12	18	13	15
15	20	11	19	15	11	20	8
7	2	17	12	4	1	16	18
5	17	3	9	10	8	0	20
2	14	19	14	8	10	9	16
12	19	20	6	5	4	13	17
6	1	12	8	7	11	14	20
18	10	17	0	3	1	0	11
9	7	11	8	20	10	1	15

Name: _____

Date: _____

©2022TunstallandGrant

Skills Check: Compose Numbers

Trace the number word. Write the numeral. Model the number in a ten frame. Show the number in a drawing of items.

Score: _____

three

two

Draw items to show the number.

Draw items to show the number.

seven

ten

Draw items to show the number.

Draw items to show the number.

Name: _____

Date: _____

©2022TunstallandGrant

Skills Check: Compose Numbers

Trace the number word. Write the numeral. Model the number in a ten frame. Show the number in a drawing of items.

Score: _____

nine

Draw items to show the number.

four

Draw items to show the number.

eight

Draw items to show the number.

one

Draw items to show the number.

Name: _____

Date: _____

©2022TunstallandGrant

Skills Check: Compose Numbers

Trace the number word. Write the numeral. Model the number in the box.

Score: _____

twenty

sixteen

Draw items to show the number.

Draw items to show the number.

fourteen

eleven

Draw items to show the number.

Draw items to show the number.

Name: _____

Date: _____

©2022TunstallandGrant

Skills Check: Decompose Numbers

Using two colors, color the counters. Decompose each number in to two parts.

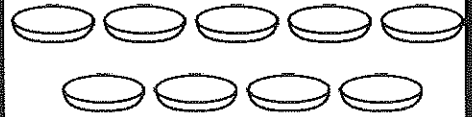
Score: _____



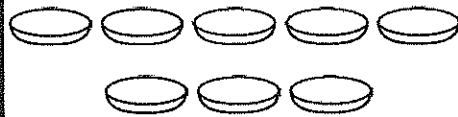
$$\underline{\quad} + \underline{\quad} = \underline{\quad}$$



$$\underline{\quad} + \underline{\quad} = \underline{\quad}$$



$$\underline{\quad} + \underline{\quad} = \underline{\quad}$$



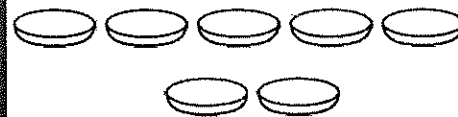
$$\underline{\quad} + \underline{\quad} = \underline{\quad}$$



$$\underline{\quad} + \underline{\quad} = \underline{\quad}$$



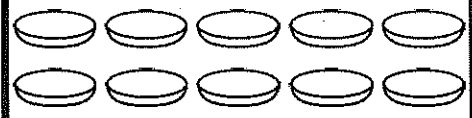
$$\underline{\quad} + \underline{\quad} = \underline{\quad}$$



$$\underline{\quad} + \underline{\quad} = \underline{\quad}$$



$$\underline{\quad} + \underline{\quad} = \underline{\quad}$$



$$\underline{\quad} + \underline{\quad} = \underline{\quad}$$



$$\underline{\quad} + \underline{\quad} = \underline{\quad}$$



$$\underline{\quad} + \underline{\quad} = \underline{\quad}$$



$$\underline{\quad} + \underline{\quad} = \underline{\quad}$$

Name: _____

Date: _____

©2022TunstallandGrant

Skills Check: Add to 10

Add to find the sum.

Score: _____

$2 + 6 =$

$4 + 4 =$

$6 + 1 =$

$3 + 5 =$

$6 + 3 =$

$0 + 8 =$

$7 + 1 =$

$2 + 7 =$

$5 + 5 =$

$3 + 4 =$

$6 + 4 =$

$2 + 4 =$

$4 + 2 =$

$6 + 1 =$

$7 + 3 =$

$1 + 9 =$

$5 + 4 =$

$4 + 6 =$

Name: _____

Date: _____
©2022TunstallandGrant

Skills Check: Subtract Within 10

Subtract to find the difference.

Score: _____

$9 - 6 =$

$7 - 4 =$

$6 - 1 =$

$8 - 5 =$

$6 - 3 =$

$10 - 8 =$

$7 - 1 =$

$9 - 6 =$

$5 - 5 =$

$9 - 4 =$

$8 - 3 =$

$6 - 4 =$

$7 - 2 =$

$6 - 1 =$

$8 - 5 =$

$10 - 9 =$

$5 - 4 =$

$6 - 4 =$

Name: _____

Date: _____

©2022TunstallandGrant

Skills Check: Missing Numbers

Fill in the missing numbers.

Score: _____

13 ___ 15	10 11 ___	8 9 ___
___ 18 19	4 5 ___	___ 19 20
6 7 ___	3 ___ 5	13 ___ 14
12 ___ 14	___ 6 7	9 10 ___
___ 17 18	11 12 ___	0 ___ 2
___ 3 4	10 ___ 12	14 ___ 16
13 14 ___	___ 10 11	19 ___ 21
___ 12 13	0 1 ___	15 ___ 17
6 ___ 8	___ 13 14	1 2 ___

Name: _____


Date: _____
©2022TunstallandGrant

Skills Check: Word Problems

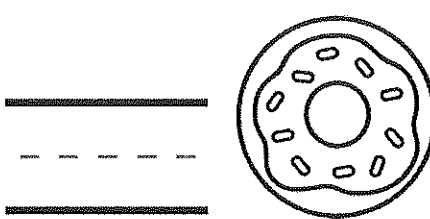
Read each word problem. Solve.

Score: _____

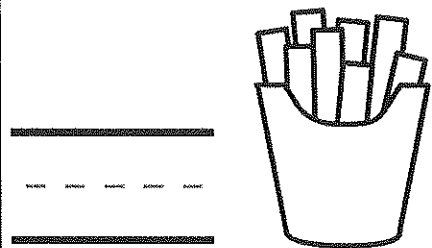
6 flowers
3 more flowers
How many flowers?



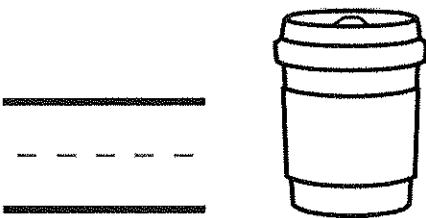
2 donuts
5 more donuts
How many donuts?




4 fries
4 more fries
How many fries?




1 coffee
2 more coffees
How many coffees?




3 teddy bears
7 more teddy bears
How many teddy bears?




2 friends
3 more friends
How many friends?



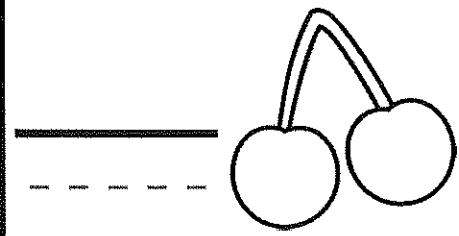
3 game pieces
1 more game piece
How many game pieces?



2 carrots
0 more carrots
How many carrots?



4 cherries
2 more cherries
How many cherries?



Name: _____

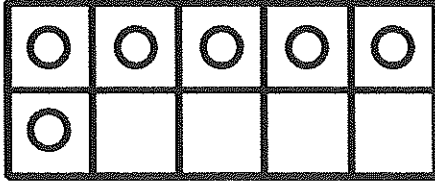
Date: _____

©2022TunstallandGrant

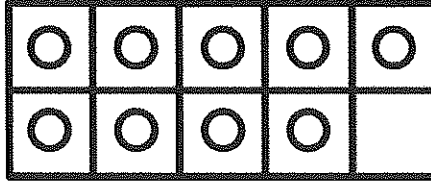
Skills Check: Make Ten

Study each ten frame. Write the numeral.

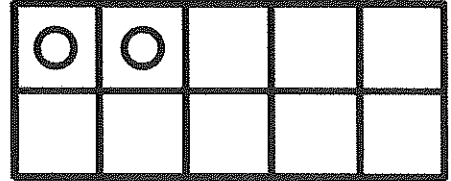
Score: _____



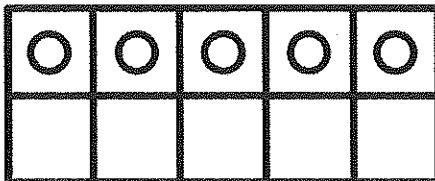
$6 + \underline{\quad} = 10$



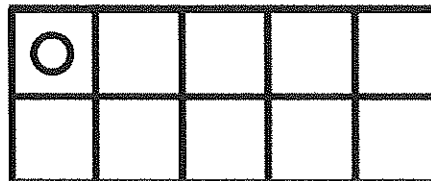
$9 + \underline{\quad} = 10$



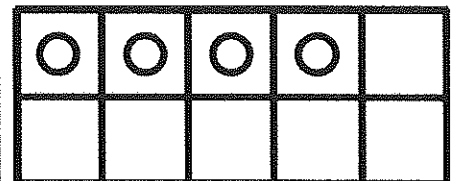
$2 + \underline{\quad} = 10$



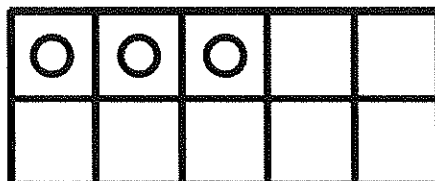
$5 + \underline{\quad} = 10$



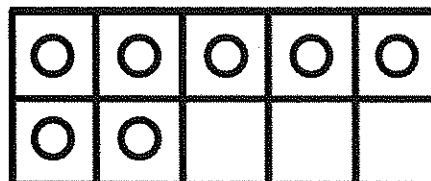
$1 + \underline{\quad} = 10$



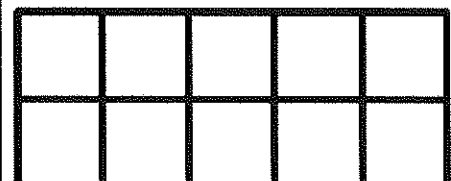
$4 + \underline{\quad} = 10$



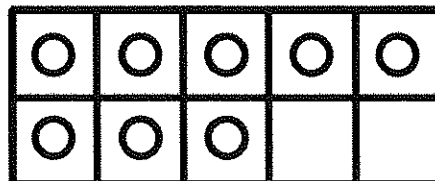
$3 + \underline{\quad} = 10$



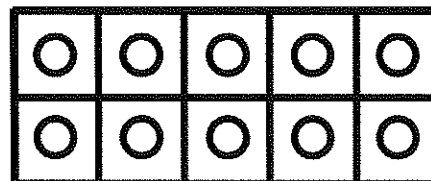
$7 + \underline{\quad} = 10$



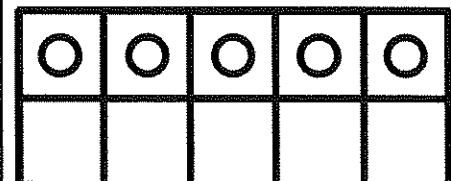
$0 + \underline{\quad} = 10$



$8 + \underline{\quad} = 10$



$10 + \underline{\quad} = 10$



$5 + \underline{\quad} = 10$

Name: _____




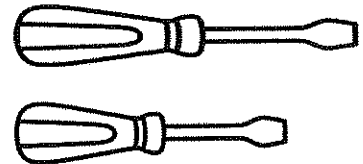
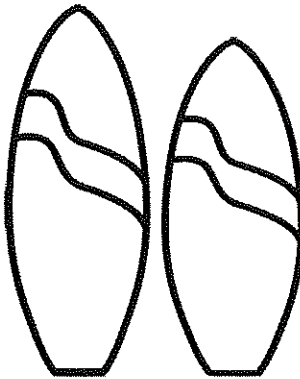
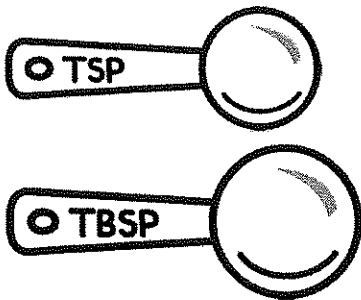


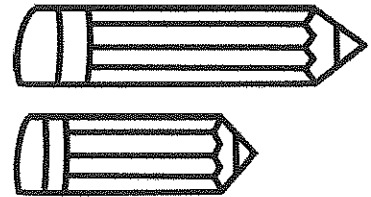


Date: _____

©2022TunstallandGrant

Skills Check: Compare Sizes

Color the item that is shorter.

Score: _____



Name: _____


Date: _____

©2022TunstallandGrant


Skills Check: Create a Graph

Make a graph from the data in the box.

Score: _____



Balls in P.E.



How many  ? _____

How many  ? _____

Name: _____

Date: _____
©2022TunstallandGrant

Skills Check: Identify Coins

Identify the coin name, the value, and then count the set. Score: _____





_____ ¢



_____ ¢





_____ ¢



_____ ¢





_____ ¢



_____ ¢





_____ ¢



_____ ¢

Name: _____

Date: _____

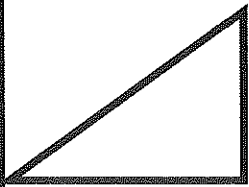
©2022TunstallandGrant

Skills Check: 2D Shapes

Identify the shape name, the sides, and the corners.


Score: _____

Word Bank: circle, triangle, rectangle, square, oval



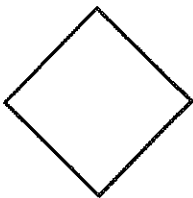
sides _____

corners _____



sides _____

corners _____




sides _____

corners _____




sides _____

corners _____



sides _____

corners _____




sides _____

corners _____



sides _____

corners _____



sides _____

corners _____

Name: _____

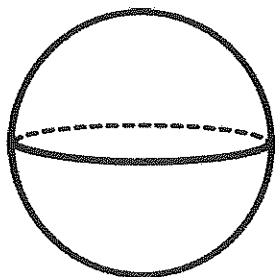
Date: _____

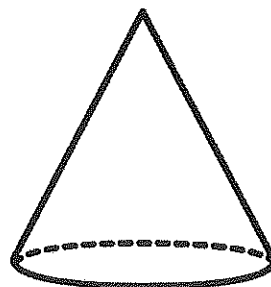
©2022TunstallandGrant

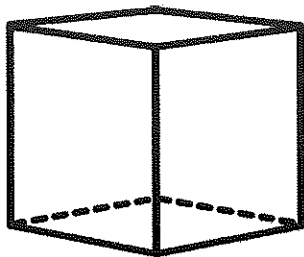
Skills Check: 3D Solids


Identify each 3D solid.

Score: _____









Word Bank

cylinder

sphere

cone

cube

Name: _____

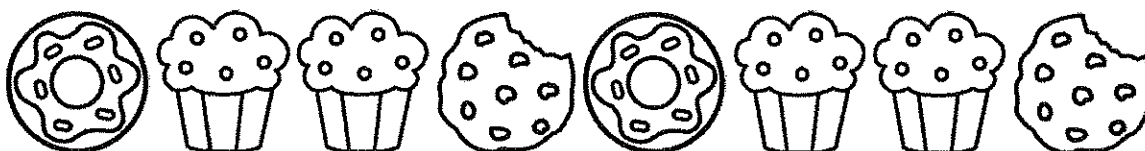



Date: _____

©2022TunstallandGrant

Skills Check: Label the Pattern

Write the letter pattern shown below in pictures.

Score: _____



Name: _____

Date: _____

©2022TunstallandGrant

Skills Check: Skip Count

Skip count and write the remaining numbers in the series. Score: _____

10, 20, _____, _____, _____, _____, _____

30, 40, _____, _____, _____, _____

60, 70, _____, _____, _____, _____

40, 50, _____, _____, _____, _____

0, 10, _____, _____, _____, _____, _____

20, 30, _____, _____, _____, _____

50, 60, _____, _____, _____, _____

70, 80, _____, _____

80, _____, _____

Name: _____

Date: _____
©2022TunstallandGrant

Skills Check: Word Problems

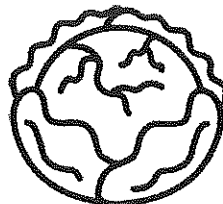
Read each word problem. Solve.

Score: _____


8 sandwiches
2 sandwiches are eaten
How many sandwiches?




5 heads of lettuce
3 are picked
How many heads of lettuce?




9 juice boxes
We drank 4
How many juice boxes?



10 paper airplanes
1 gets lost
How many paper airplanes?




9 balloons
2 popped
How many balloons?



6 ice cream cones
3 melted
How many ice cream cones?



8 butterflies
0 flew away
How many butterflies?



9 baseballs
8 get hit over the fence
How many baseballs?



7 glue sticks
3 ran out of glue
How many glue sticks?



Name: _____

Date: _____

©2022TunstallandGrant

Skills Check: Ten and More

Shade the ten rods to show a model of each number.

Score: _____

14

17

11

19

10

15

13

16

12

18

20

15